

Name Aug. 31 HW Class _____ Date _____

Score _____

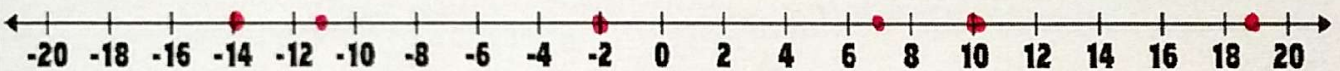
Integers and Number Lines Homework

Part I: Write an integer that represents the number in each statement.

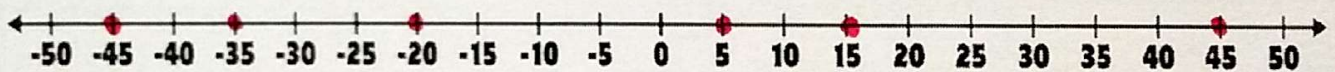
- Misty received six gifts from her friends. +6/6
- The submersible ship cruised at a depth of 400 feet below sea level. -400

Part II: Locate and graph the integers on the number lines.

3. 19, -14, -11, 7, 10, -2

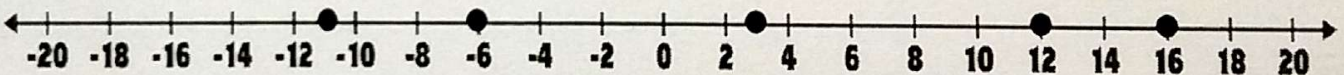


4. -35, 45, 5, -20, 15



Part III: Compare and order integers on number lines.

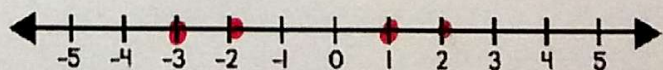
5. Order the integers graphed on the number line from greatest to least.



16, 12, 3, -6, -11

6. The table below lists the charges of several ions. Graph the ions' charges on the number line and list them from least to greatest.

Ion name	Ion charge
Hydrogen	+1
Phosphate	-3
Oxide	-2
Calcium	+2



-3, -2, 1, 2